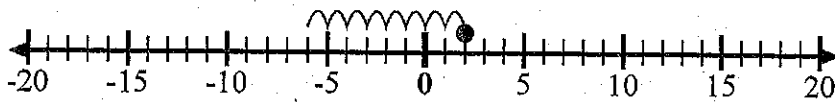


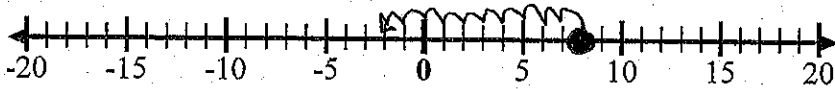


Use the numberlines to show each expression and solve.

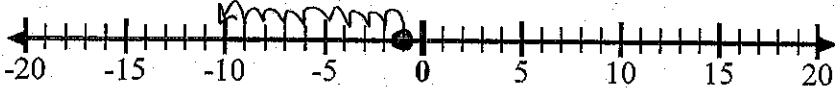
Ex) Start at 2 and add -8



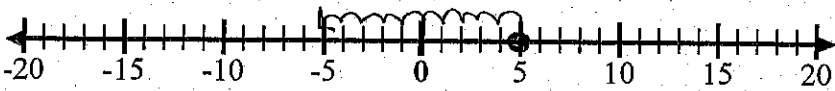
1) Start at 8 and add -10



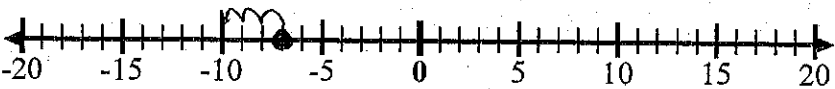
2) Start at -1 and add -9



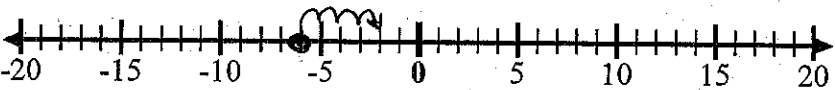
3) Start at 5 and add -10



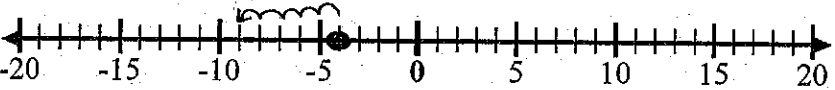
4) Start at -7 and add -3



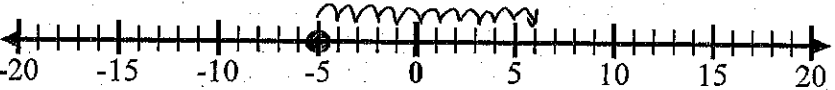
5) Start at -6 and add 4



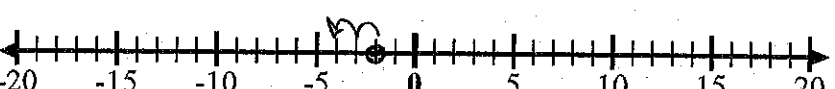
6) Start at -4 and add -5




7) Start at -5 and add 11




8) Start at -2 and add -2




9) Start at -5 and add 14



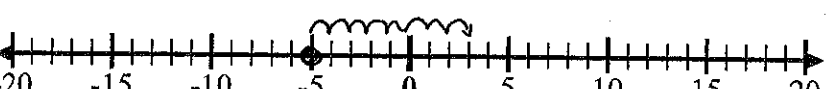
10) Start at 0 and add -10



11) Start at -6 and add 14



12) Start at -5 and add 8



Answers

Ex. $2 + -8 = -6$

1. $8 + (-10) = -2$

2. $-1 + (-9) = -10$

3. $5 + (-10) = -5$

4. $-7 + (-3) = -10$

5. $-6 + 4 = -2$

6. $-4 + (-5) = -9$

7. $-5 + 11 = 6$

8. $-2 + (-2) = -4$

9. $-5 + 14 = 9$

10. $0 + (-10) = -10$

11. $-6 + 14 = 8$

12. $-5 + 8 = 3$